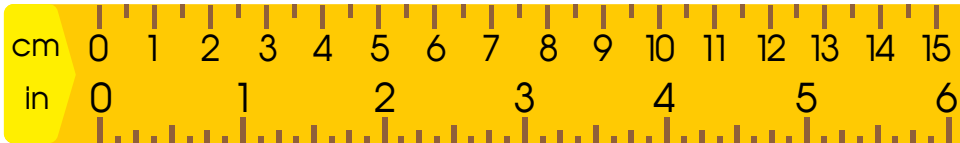


Compare Length in Inches and Centimeters

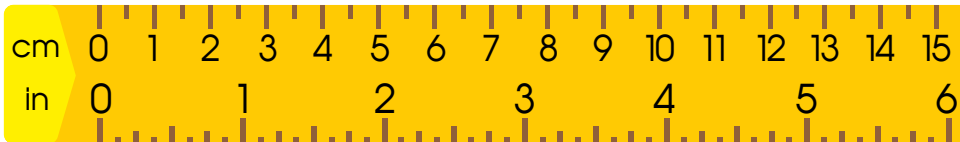
Find the difference between the two objects in centimeters.

Check the correct answer.



2 cm

8 cm

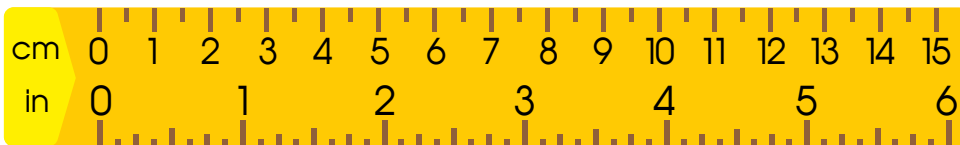


5 cm

4 cm

Find the difference between the two objects in inches.

Check the correct answer.



2 in

3 in



7 in

12 in

