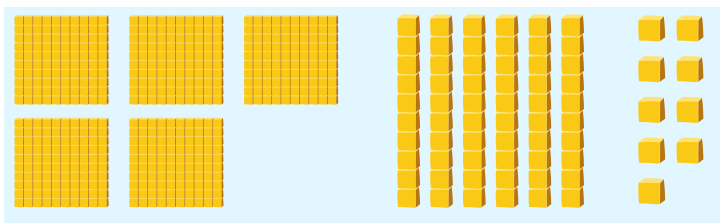


Adding and Subtracting to 1000:

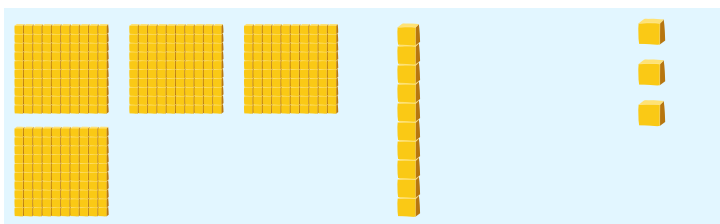
ASSESSMENT 1

Solve the problems and check the correct answers.

569

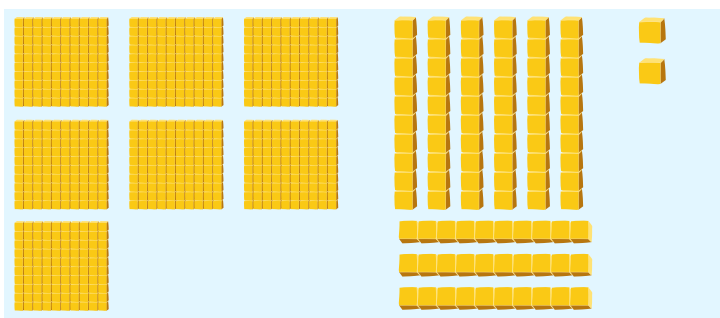


+413

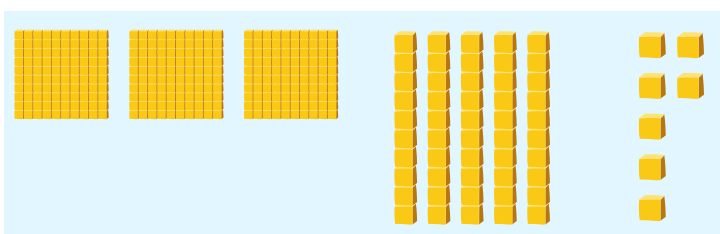


<input type="text"/>	<input type="text"/>
976	982
<input type="text"/>	<input type="text"/>
976	882

792




+357




<input type="text"/>	<input type="text"/>
435	1149
<input type="text"/>	<input type="text"/>
345	445

853



+291



<input type="text"/>	<input type="text"/>
1144	562
<input type="text"/>	<input type="text"/>
642	662