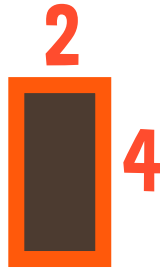



AREA AND PERIMETER CHALLENGE

Look at the pictures in the middle, and trace along the dotted line to the correct perimeter and area.

12
AREA



12
PERIMETER




21
AREA



22
PERIMETER



20
AREA



20
PERIMETER

