

FOOD FRACTIONS!

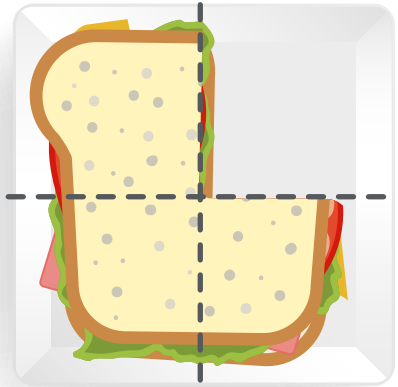
What fraction of the food has been eaten? Check the correct answer.



$\frac{1}{2}$

$\frac{1}{4}$

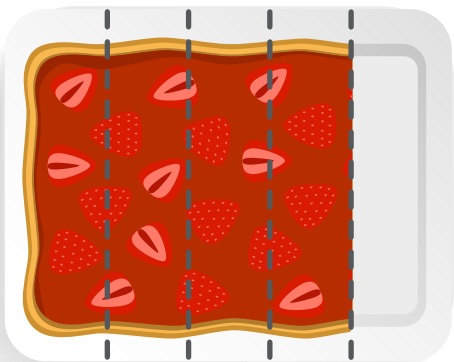
$\frac{2}{1}$

☐☐☐

$\frac{1}{4}$

$\frac{1}{5}$

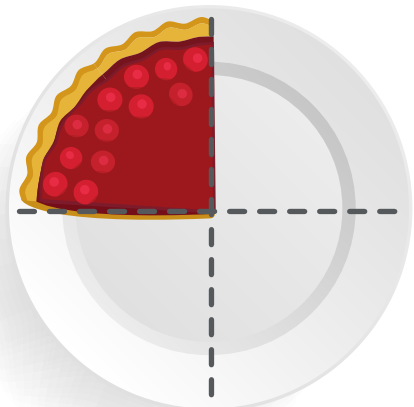
$\frac{1}{7}$

☐☐☐

$\frac{5}{1}$

$\frac{1}{2}$

$\frac{1}{5}$

☐☐☐

$\frac{1}{4}$

$\frac{2}{3}$

$\frac{3}{4}$

☐☐☐