

Sports Area

Area = length x width

Read the labels and check the box for the correct answer.



Length of the soccer field

7

8

10

9

8

Width of the soccer field

10

8

7

6

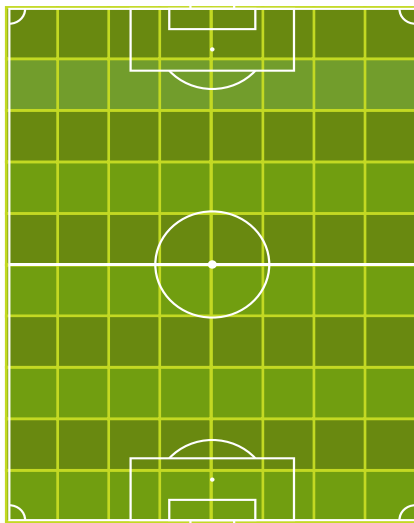
Area of the soccer field

18

20

80

75




Length of the hockey rink

9

8

7

10



6

Width of the hockey rink

9

8

7

6

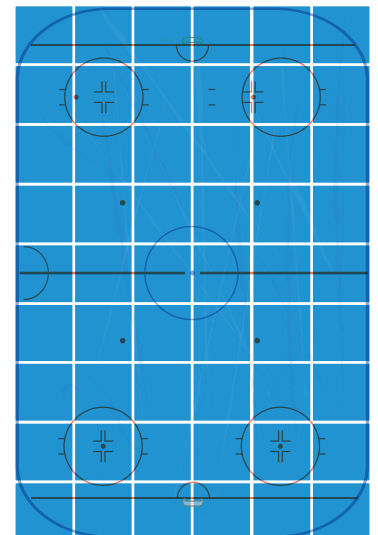
Area of the hockey rink

25

96

54

60



9