


Furniture Shop Multiplication

Look at the pictures. How can you describe the number of objects in each group? Check the box next to the correct number sentence.



$3+3$

3×1


3×3

2×5

2×2




$2+2+2+5$



$3+8$

3×8



$3+3+8+8$

