

# Multiplying 2's and DOUBLING LEAVES



When you multiply by 2, you are doubling the other number.

Follow through the lifecycle of the plant by multiplying. Solve each fact by drawing a line to the correct answer.

1

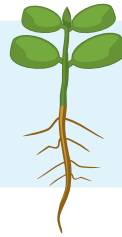


$2 \times 1 = ?$

2


5

$2 \times 2 = ?$



4

4




$2 \times 3 = ?$

6


8

$2 \times 4 = ?$



6

10



$2 \times 5 = ?$

5