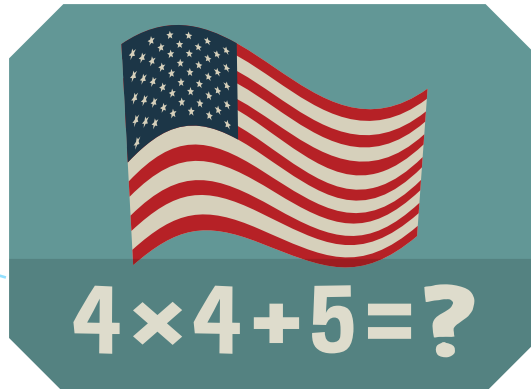


TWO-STEP PROBLEMS

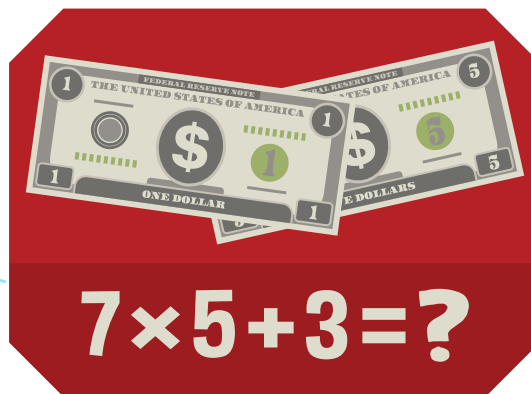
Solve the equations below. Draw on the dotted line to the correct answer choice.

18



21

38



23

5



12

14



10





Two-Step Problems Worksheet



Worksheet Answer Key.

Scan the QR code to get the answer key for this worksheet. In it, you'll also find an explanation of how to solve the worksheet and additional learning resources.

TWO-STEP PROBLEMS
Solve the equations below. Draw on the dotted line to the correct answer choice.

18	 $4 \times 4 + 5 = ?$	21
38	 $7 \times 5 + 3 = ?$	23
5	 $42 \div 6 - 2 = ?$	12
14	 $48 \div 8 + 4 = ?$	10

KIDS ACADEMY
Copyright © 2019 Kids Academy Company. All rights reserved. Get more worksheets at www.kidsacademy.com



Complete this worksheet online.

Scan the QR code below to open this interactive worksheet!

Let your child learn and play! The worksheet comes with a professional voice over of the task, and will be automatically checked and scored upon completion. Your child will also get suggestions of similar activities.



You can open this online worksheet in any browser and on any device. NO registration or app installation is needed to start learning. Just scan the QR code and there you are!

Ready to learn more? Use the code below to access a free lesson!

Interactive games, educational videos, online quizzes and our full worksheet collection – check it all out now!

For Students and Parents



Check out this free Trial Lesson with fun worksheets for kids!



<https://www.kidsacademy.com/tg/>

For Schools and Teachers



<https://www.kidsacademy.com/classroom/>