





# Base 10 Blocks: Part 1


Circle the number that is shown by base-10 blocks. Then, check the box with the number correctly shown in expanded form.

 = 1  
1 cube

 = 10  
1 long

 = 100  
1 flat

 = 1000  
1000 cubes



530


5500

5300

8000

5000+300

500+3000



3307

2037

2328

2137

200+100+30+7

2000+100+30+7

