





# Korean Cooking



Hyun-Ki and his brother Minkyu cooked many traditional Korean foods for the Mid-Autumn Festival. Who ate more of each dish? Compare the fractions and select the correct comparison symbol.



 $\frac{5}{6}$ 

kimchi

 $\frac{4}{6}$ 

 $>$ 
 $=$ 
 $<$ 

 $\frac{8}{10}$ 


sticky rice cake

 $\frac{9}{10}$ 

 $>$ 
 $=$ 
 $<$ 


 $\frac{3}{8}$ 

bibimbap

 $\frac{3}{8}$ 

 $>$ 
 $=$ 
 $<$ 

 $\frac{2}{6}$ 

yugwa

 $\frac{4}{6}$ 

 $>$ 
 $=$ 
 $<$