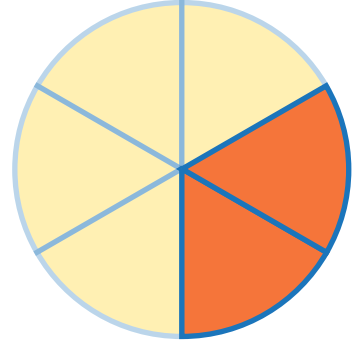
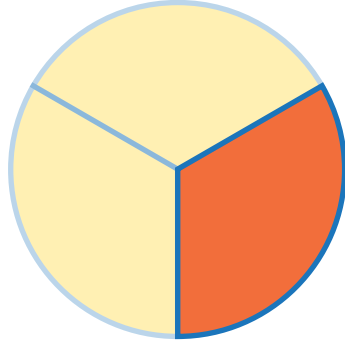


Make it Equal

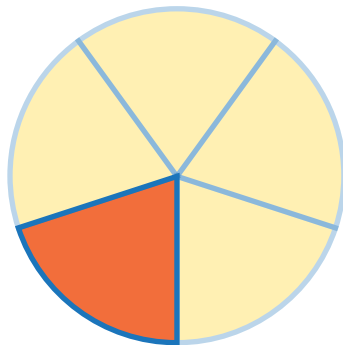
Use the fraction models
to complete the statements below.
Check the correct numerator.

$$\frac{1}{3} = \frac{?}{6}$$



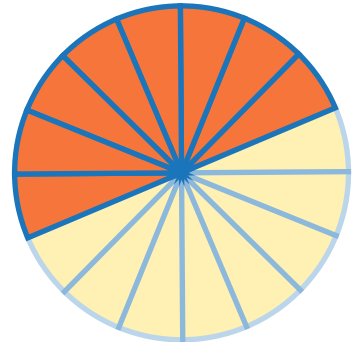
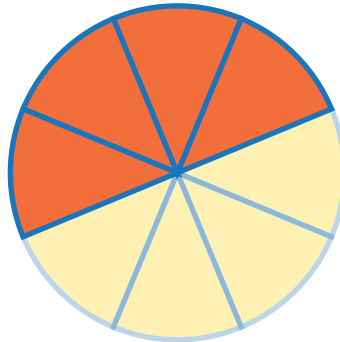
- 1 2 3 4

$$\frac{1}{5} = \frac{?}{10}$$



- 2 3 5 7

$$\frac{4}{8} = \frac{?}{16}$$



- 4 6 8 10