


# Rounding Numbers Up

This science researcher observed animals in the rainforest and recorded exactly how many she saw of each type of animal. Help her by rounding the total number for each animal **up to the nearest 10**. Circle the correct answer.



gorilla

76

70

80

90

---



jaguar

29

10

20

30

---



sloth


68

60

70

80

---



toucan


85

70

80

90

---



tiger

16

20

10

30