




# 14 in School



Trace a line to the missing number to make 14.




8

$$4 + ? = 14$$



10

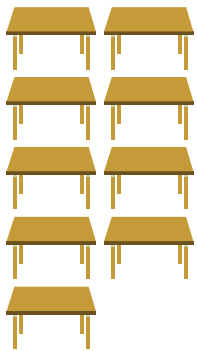


6

$$7 + ? = 14$$




7





9

$$5 + ? = 14$$




5



8

$$8 + ? = 14$$



6

