


☆ ☆ Space Math ☆ ☆


Look at the numbers on the top of the rocket.
Then, circle the numbers below each rocket
that add up to the number on the top.



$3+4$

$5+2$


$2+6$



$5+3$

$7+2$

$4+6$



$5+1$

$3+3$

$2+5$