




# Baseball Addition


Look at the pictures. Use your fingers to add.  
Check the box with the correct answer.

- 1** John hit 4 homeruns in one game and 2 homeruns in another. How many homeruns did John hit in the two games?




<input type="checkbox"/>	4	<input type="checkbox"/>	6
<input type="checkbox"/>	8	<input type="checkbox"/>	10

- 2** Becky's team scored 4 runs. Then her team scored 4 more. How many runs did Becky's team have now?



<input type="checkbox"/>	5	<input type="checkbox"/>	6
<input type="checkbox"/>	7	<input type="checkbox"/>	8

- 3** Cody caught 3 fly balls in his first game. He caught 4 fly balls in his next game. How many fly balls did Cody catch in the two games?



<input type="checkbox"/>	7	<input type="checkbox"/>	9
<input type="checkbox"/>	6	<input type="checkbox"/>	8