


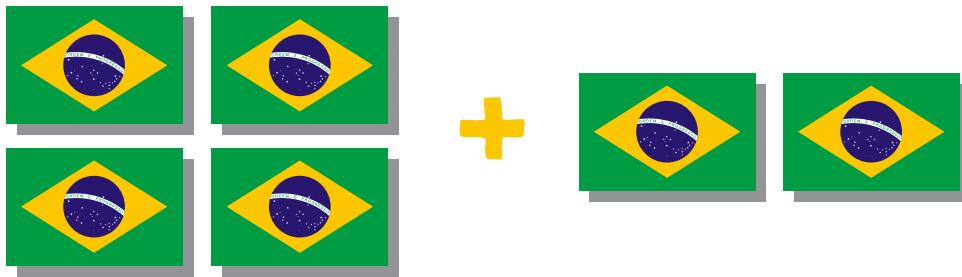
Underline the number sentence that matches the picture.



$$4 + 1 = 5$$

$$4 + 2 = 6$$


$$4 + 4 = 8$$



$$4 + 3 = 7$$

$$1 + 4 = 5$$


$$4 + 2 = 6$$



$$4 + 5 = 9$$

$$4 + 3 = 7$$

$$3 + 2 = 5$$



$$4 + 5 = 9$$

$$4 + 3 = 7$$

$$4 + 4 = 8$$