





# SUBTRACTING 3


Underline the number sentence that matches the picture.



$$4 - 3 = 1$$

$$4 - 1 = 3$$




$$3 - 1 = 2$$



$$5 - 3 = 2$$

$$5 - 4 = 1$$

$$5 - 2 = 3$$



$$3 - 2 = 1$$

$$3 - 1 = 2$$

$$3 - 3 = 0$$