

WHAT MAKES 19?

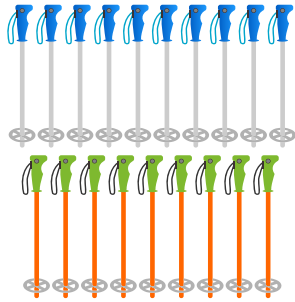
Trace the line between the numbers that make 19.



9

10

13



2

5


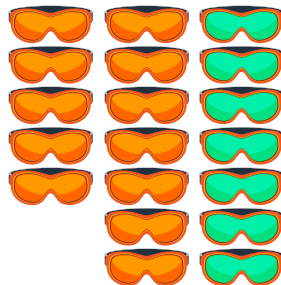
6



11

2

7



11

8

12

