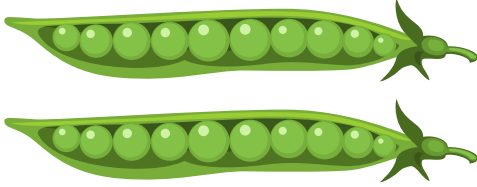


COUNTING WITH PEAPODS

Each peapod has 10 peas in it. Count the peapods and say what numbers they show. Check the correct numbers.

 = 10



20


30

25

30

80


40



45

50

55



80

100

90

