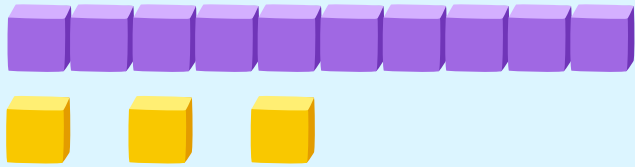


# Counting with Base Ten Blocks

Count the blocks and check the correct number!

1 ten + 3 ones = ?




13

15

16

1 ten + 5 ones = ?




11

19

15

1 ten + 2 ones = ?

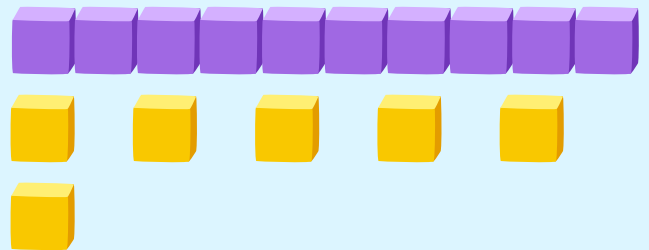


12

17

19

1 ten + 6 ones = ?




13

15

16

1 ten + 1 one = ?

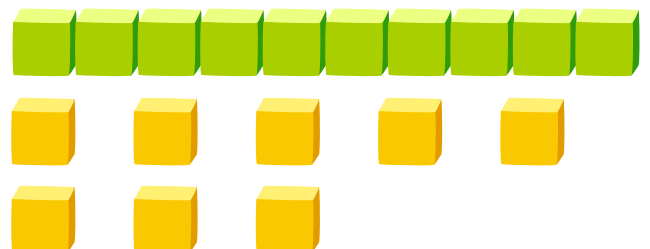


10

11

12

1 ten + 8 ones = ?



18

14

17