



Count the animals to add the two numbers in each number sentence. Write the correct answers.




$$1 + 2 = \underline{\quad}$$



$$1 + 3 = \underline{\quad}$$



$$1 + 1 = \underline{\quad}$$



$$2 + 3 = \underline{\quad}$$



$$2 + 2 = \underline{\quad}$$