




Count the animals to add the two numbers in each number sentence. Write the correct answers.


 + 
 
 1 + 4 =         

---


 + 
 
 1 + 3 =         

---


 + 
 
 1 + 2 =         

---


 + 
 
 2 + 2 =         

---


 + 
 
 1 + 1 =