




Count the animals to add the two numbers in each number sentence. Write the correct answers.

 +   $1 + 4 = \underline{\quad}$

---

 +   $1 + 3 = \underline{\quad}$

---

 +   $2 + 2 = \underline{\quad}$

---

 +   $2 + 3 = \underline{\quad}$

---

 +   $1 + 2 = \underline{\quad}$